


Name: _____


What time do you have?

Fact: It can be too warm to snow, but never too cold.




Show the time for each clock.

1.




9:15


2.




3.




4.



5.




6.




7:05


7.



8.



9.



Find the difference.

10.

$$\begin{array}{r} 905 \\ - 366 \\ \hline \end{array}$$

11.

$$\begin{array}{r} 700 \\ - 177 \\ \hline \end{array}$$

12.

$$\begin{array}{r} 904 \\ - 816 \\ \hline \end{array}$$

13.

$$\begin{array}{r} 300 \\ - 119 \\ \hline \end{array}$$