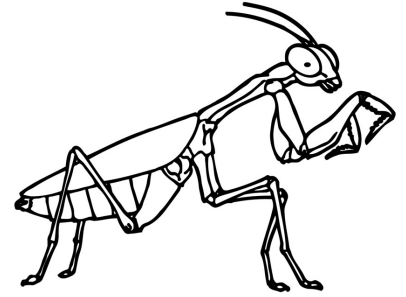


Name: _____


Rounding is Fun

How did the praying mantis uncover the caterpillar's secret plans?
She bugged his phone.




Round to the nearest 10 or 100. Look at the underlined digit.

1. 26 = _____ 2. 814 = _____ 3. 53 = _____
4. 410 = _____ 5. 33 = _____ 6. 14 = _____
7. 936 = _____ 8. 916 = _____ 9. 105 = _____



Solve.

10. Use the number line to help you round 142 to the nearest 10.
11. Use the number line to round 147 to the nearest 10.



Solve.

12. Round 771 to the nearest 10. Use the number line to help.
13. Round 775 to the nearest 10. Use the number line to help.

Read the questions carefully and solve the problems.

14. Liam and Kaitlin went to the park. They spent 92 minutes there. About how long were they at the park?
15. Mr. Weir had 632 geodes of different sizes. To the nearest hundred, about how many geodes does he have?
16. Joslyn and Harley spent \$232 on dresses they found in the store. To the nearest hundred, about how much did they spend?