


Name: \_\_\_\_\_


# Time moves in one direction.

What do you call a dinosaur that is sleeping? A dino-snore




Show the time for each clock.


1.




2.




3.




4.




5.




6.




7.



8.



9.



Find the difference.

10.

$$\begin{array}{r} 800 \\ - 328 \\ \hline \end{array}$$

11.

$$\begin{array}{r} 305 \\ - 110 \\ \hline \end{array}$$

12.

$$\begin{array}{r} 700 \\ - 305 \\ \hline \end{array}$$

13.

$$\begin{array}{r} 540 \\ - 371 \\ \hline \end{array}$$