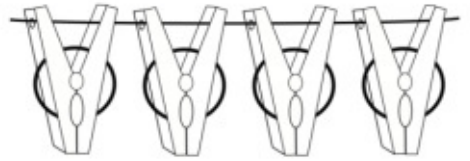


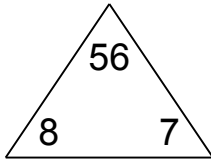
Name: \_\_\_\_\_ Date: \_\_\_\_\_



# Fact Families

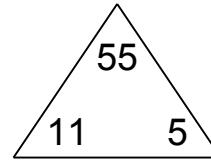
Did you hear about what happened at the laundromat last night? Four clothespins held up two shirts!

1.



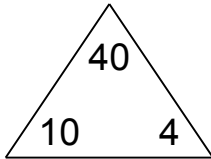
$$\begin{array}{l} \square \times \square = \square \\ \square \times \square = \square \\ \square \div \square = \square \\ \square \div \square = \square \end{array}$$

4.



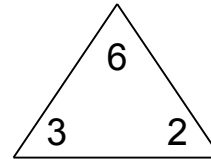
$$\begin{array}{l} \square \times \square = \square \\ \square \times \square = \square \\ \square \div \square = \square \\ \square \div \square = \square \end{array}$$

2.



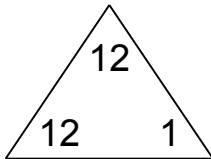
$$\begin{array}{l} \square \times \square = \square \\ \square \times \square = \square \\ \square \div \square = \square \\ \square \div \square = \square \end{array}$$

5.



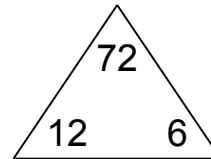
$$\begin{array}{l} \square \times \square = \square \\ \square \times \square = \square \\ \square \div \square = \square \\ \square \div \square = \square \end{array}$$

3.



$$\begin{array}{l} \square \times \square = \square \\ \square \times \square = \square \\ \square \div \square = \square \\ \square \div \square = \square \end{array}$$

6.



$$\begin{array}{l} \square \times \square = \square \\ \square \times \square = \square \\ \square \div \square = \square \\ \square \div \square = \square \end{array}$$

Solve and show your work.

7. Claire's garden has 12 rows of pumpkins. Each row has three pumpkins. How many pumpkins does Claire have in all?

---

Solve and show your work.

8. Kamry made 56 cookies for a bake sale. She put the cookies in bags, with 8 cookies in each bag. How many bags did she have for the bake sale?

---

Solve and show your work

9. Kinzie has 321 more books than Mikael. Mikael has 815 books. How many books does Kinzie have?

---

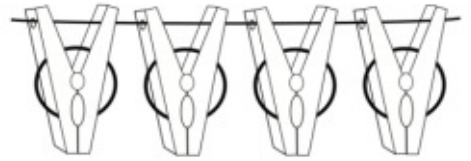
Solve.

10. 464 pens were in the basket. Some of the pens were removed from the basket. Now there are 233 pens. How many pens were removed from the basket?

---

Name: \_\_\_\_\_

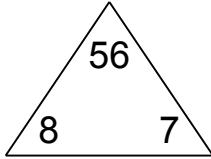
Date: \_\_\_\_\_



# Fact Families

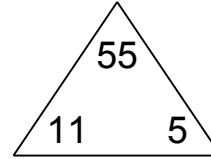
Did you hear about what happened at the laundromat last night? Four clothespins held up two shirts!

1.



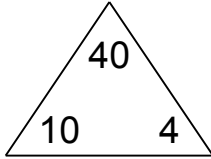
$$\begin{array}{l} 8 \times 7 = 56 \\ 7 \times 8 = 56 \\ 56 \div 8 = 7 \\ 56 \div 7 = 8 \end{array}$$

4.



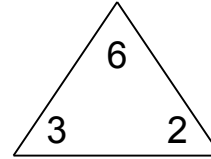
$$\begin{array}{l} 11 \times 5 = 55 \\ 5 \times 11 = 55 \\ 55 \div 11 = 5 \\ 55 \div 5 = 11 \end{array}$$

2.



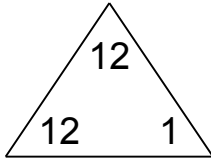
$$\begin{array}{l} 10 \times 4 = 40 \\ 4 \times 10 = 40 \\ 40 \div 10 = 4 \\ 40 \div 4 = 10 \end{array}$$

5.



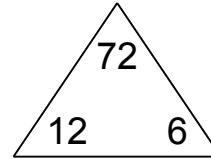
$$\begin{array}{l} 3 \times 2 = 6 \\ 2 \times 3 = 6 \\ 6 \div 3 = 2 \\ 6 \div 2 = 3 \end{array}$$

3.



$$\begin{array}{l} 12 \times 1 = 12 \\ 1 \times 12 = 12 \\ 12 \div 12 = 1 \\ 12 \div 1 = 12 \end{array}$$

6.



$$\begin{array}{l} 12 \times 6 = 72 \\ 6 \times 12 = 72 \\ 72 \div 12 = 6 \\ 72 \div 6 = 12 \end{array}$$

Solve and show your work.

7. Claire's garden has 12 rows of pumpkins. Each row has three pumpkins. How many pumpkins does Claire have in all?

36

---

Solve and show your work.

8. Kamry made 56 cookies for a bake sale. She put the cookies in bags, with 8 cookies in each bag. How many bags did she have for the bake sale?

7

---

Solve and show your work

9. Kinzie has 321 more books than Mikael. Mikael has 815 books. How many books does Kinzie have?

1,136

---

Solve.

10. 464 pens were in the basket. Some of the pens were removed from the basket. Now there are 233 pens. How many pens were removed from the basket?

231

---