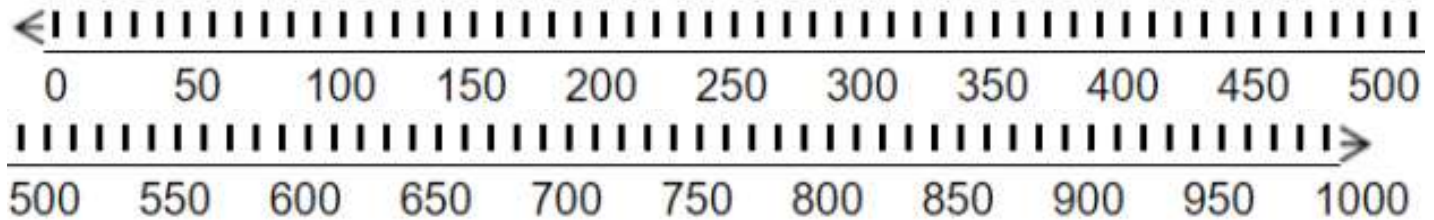



Name: \_\_\_\_\_

# Friendly Hundreds

Tongue Twister: Shallow ships show some signs of sinking.



Round to the nearest 100.


1.  $\underline{6}27 =$  \_\_\_\_\_      2.  $\underline{4}89 =$  \_\_\_\_\_      3.  $\underline{2}23 =$  \_\_\_\_\_

4.  $\underline{8}80 =$  \_\_\_\_\_      5.  $\underline{8}65 =$  \_\_\_\_\_      6.  $\underline{5}31 =$  \_\_\_\_\_


7.  $\underline{9}26 =$  \_\_\_\_\_      8.  $\underline{6}75 =$  \_\_\_\_\_      9.  $\underline{1}36 =$  \_\_\_\_\_

10.  $\underline{7}86 =$  \_\_\_\_\_      11.  $\underline{1}51 =$  \_\_\_\_\_      12.  $\underline{2}57 =$  \_\_\_\_\_

Draw the clock hands to show the passage of time.



What time will it be in 4 hours 15 minutes?



What time will it be in 3 hours 0 minutes?