


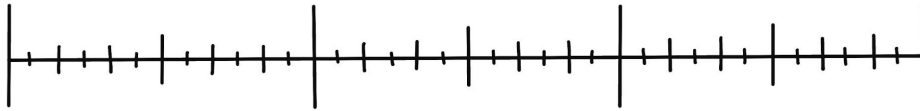
Name: _____



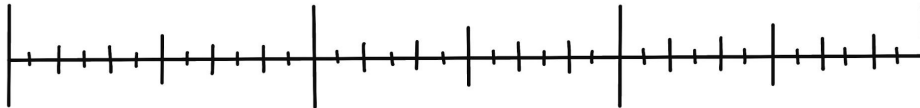
Elapsed Time

Directions: Label each number line and use it to answer each question. Circle your answer.

- 1.) Emery was swimming with her family. They started swimming at 9:00 am and finished swimming at 11:30 am. How much time did they spend swimming?



- 2.) Bryson was playing his favorite game on the Switch. He started playing at 5:40 pm and finished playing at 6:25 pm. How much time did Bryson spend playing the Switch?



- 3.) Makayla was baking her favorite cookies. She started baking cookies at 2:00 pm, and she finished at 4:15 pm. How much time did Makayla spend baking cookies?

