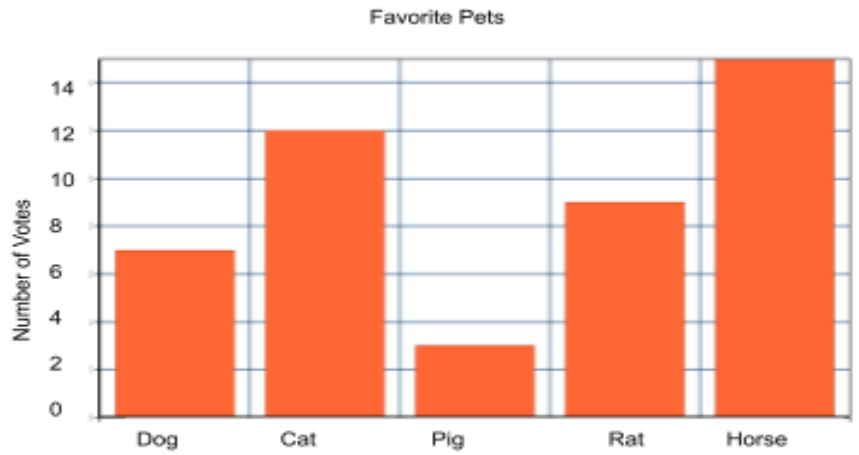
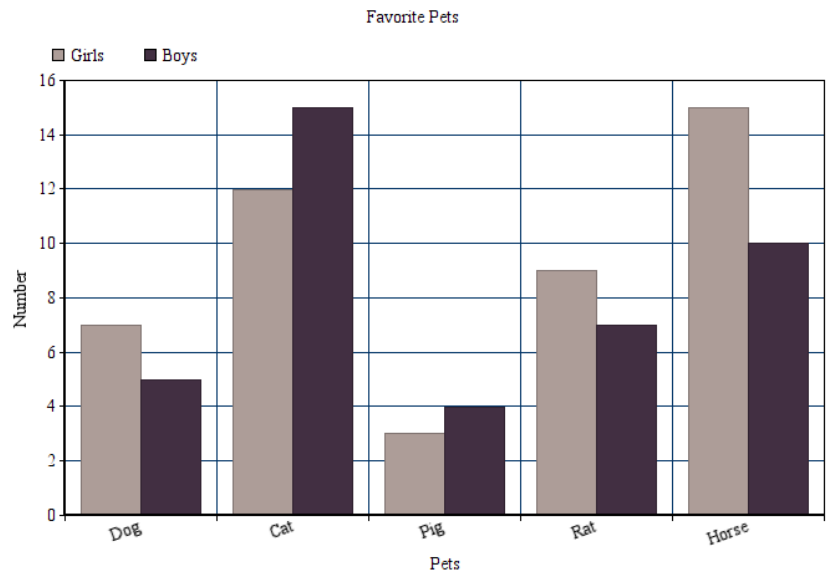


Graphing Reteach

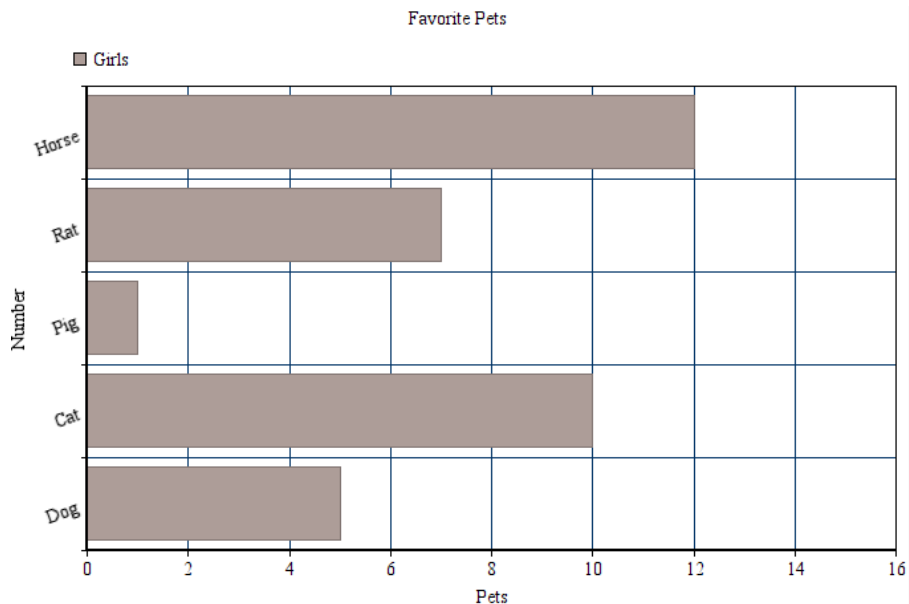
- Based on the graph, how many fewer students like dogs than cats?
- Based on the graph, how many more students like rats than pigs?
- How many more students like Horses than rats?




- What is the difference between the number of girls and boys who like dogs?
- How many more boys like cats than the girls?
- What is the difference between the number of girls and boys that like horses?




- How fewer rats were liked than cats?
- How many more dogs were liked by girls than pigs?
- How many fewer cats were liked by girls than horses?



How Many Push-Ups They Can Do

Jacob	
Joseph	
Nathan	
Dallin	
Chelsea	

Each  is 10 push-ups.

10. How many more push-ups can Jacob do than Joseph?
11. How many fewer push-ups can Chelsea do than Dallin?
12. How many more push-ups can Chelsea do than Nathan?

Graphing Reteach Answer Key

1. Based on the graph, how many fewer students like dogs than cats?

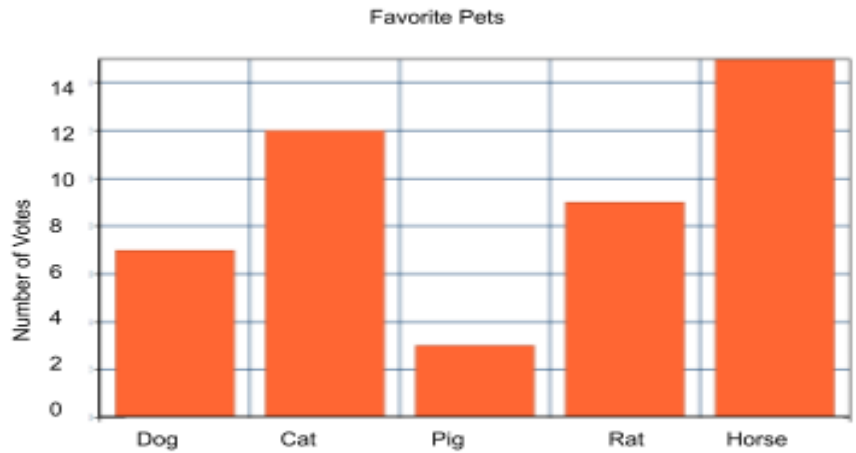
a. 5

2. Based on the graph, how many more students like rats than pigs?

a. 6

3. How many more students like Horses than rats?

a. 6



4. What is the difference between the number of girls and boys who like dogs?

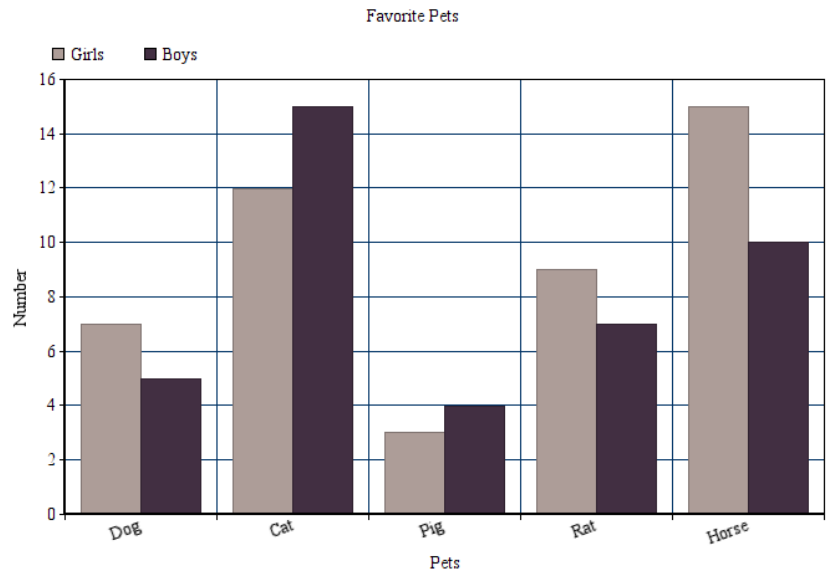
a. 2

5. How many more boys like cats than girls?

a. 3

6. What is the difference between the number of girls and boys that like horses?

a. 5



7. How fewer rats were liked than cats?

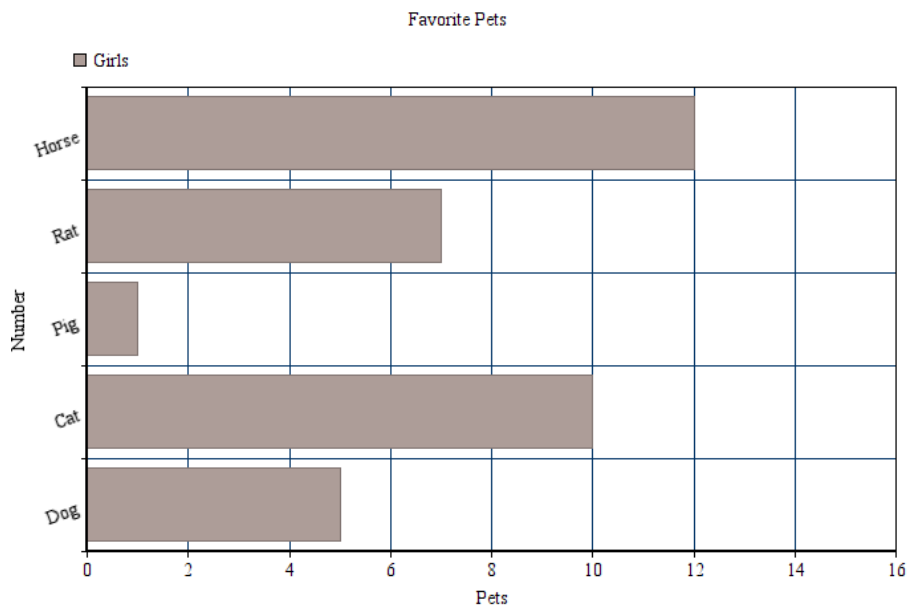
a. 3

8. How many more dogs were liked by girls than pigs?

a. 4


9. How many fewer cats were liked by girls than horses?

a. 2



How Many Push-Ups They Can Do

Jacob	
Joseph	
Nathan	
Dallin	
Chelsea	

Each  is 10 push-ups.

10. How many more push-ups can Jacob do than Joseph?

a. 20

11. How many fewer push-ups can Chelsea do than Dallin?

a. 25

12. How many more push-ups can Chelsea do than Nathan?

a. 15